



## 2018 PRIMARY 6 PRELIMINARY EXAMINATION

Name : \_\_\_\_\_ (     )     Date: 1 August 2018

Class : Primary 6     )

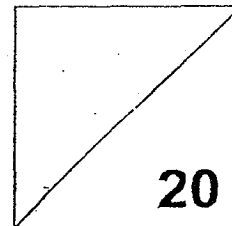
Time: 8.00 a.m. - 9.00 a.m.

Parent's Signature : \_\_\_\_\_

Marks: \_\_\_\_\_ / **100**

Paper 1 comprises 2 booklets, A and B.

### **MATHEMATICS PAPER 1 (BOOKLET A)**



#### INSTRUCTIONS TO CANDIDATE

1. Write your name, class and register number.
2. Do not turn over this page until you are told to do so.
3. Follow all instructions carefully.
4. Answer all questions.
5. Shade your answers in the Optical Answer Sheet (OAS) provided.
6. You are **not** allowed to use a calculator.

1  
2  
3  
4  
5  
6  
7  
8  
9  
10  
11  
12  
13  
14  
15  
16  
17  
18  
19  
20  
21  
22  
23  
24  
25  
26  
27  
28  
29  
30  
31  
32  
33  
34  
35  
36  
37  
38  
39  
40  
41  
42  
43  
44  
45  
46  
47  
48  
49  
50  
51  
52  
53  
54  
55  
56  
57  
58  
59  
60  
61  
62  
63  
64  
65  
66  
67  
68  
69  
70  
71  
72  
73  
74  
75  
76  
77  
78  
79  
80  
81  
82  
83  
84  
85  
86  
87  
88  
89  
90  
91  
92  
93  
94  
95  
96  
97  
98  
99  
100

Questions 1 to 10 carry 1 mark each. Questions 11 to 15 carry 2 marks each.  
For each question, four options are given. One of them is the correct answer.  
Make your choice (1, 2, 3 or 4).

Shade the oval (1, 2, 3 or 4) on the Optical Answer Sheet.

(20 marks)

1. 7 kg 4 g is the same as \_\_\_\_\_.

- (1) 74 g
- (2) 704 g
- (3) 7 004 g
- (4) 7 040 g

2. Express  $40 \div 200$  as a decimal.

- (1) 0.5
- (2) 0.2
- (3) 0.05
- (4) 0.02

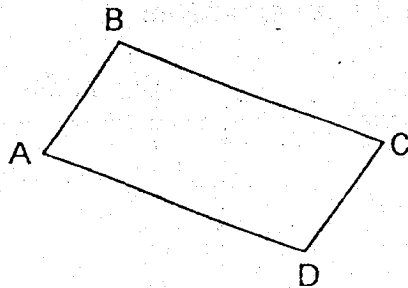
3. What is the value of  $50 \div 5 + (22 - 9) \times 2$ ?

- (1) 14
- (2) 36
- (3) 46
- (4) 81

4. Janah spent 1 h 45 min watching a movie. It ended at 1.15 p.m.  
What time did the movie start?

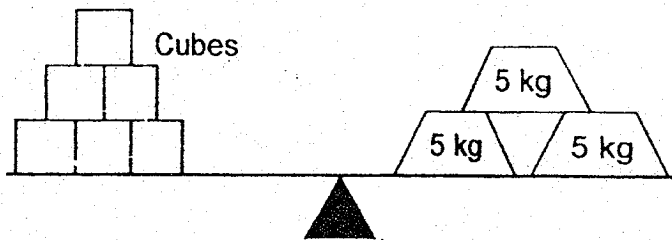
- (1) 11.30 a.m.
- (2) 11.30 p.m.
- (3) 3.00 a.m.
- (4) 3.00 p.m.

5. ABCD is a parallelogram. Which of the following is **false**?



- (1)  $\angle ABC + \angle BCD = 180^\circ$
- (2)  $\angle BCD = \angle DAB$
- (3)  $\angle CDA = \angle DAB$
- (4)  $\angle DAB + \angle ABC = 180^\circ$

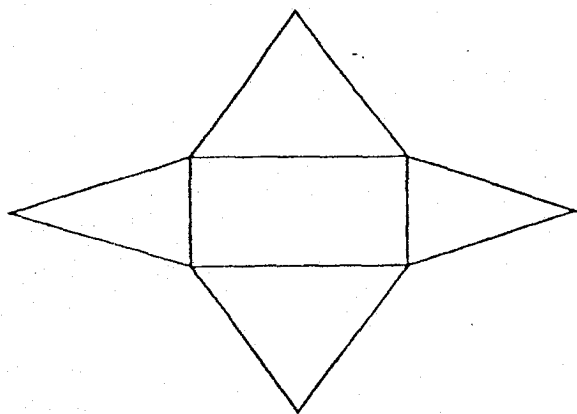
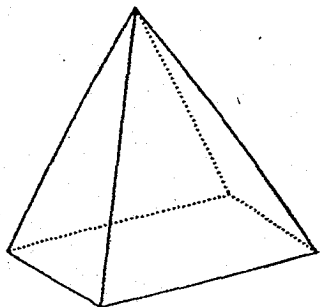
6. What is the average mass of each cube?



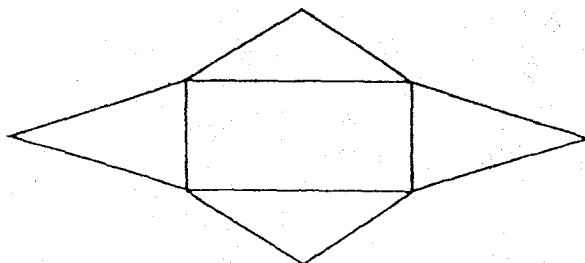
- (1) 15 kg
  - (2) 5 kg
  - (3) 2.5 kg
  - (4) 0.4 kg
7. A machine is able to fill up 10 bottles of drinks in 1 minute. How much time does the same machine take to fill up 1 bottle of drink?

- (1) 10 s
- (2) 6 s
- (3)  $\frac{1}{6}$  s
- (4)  $\frac{1}{10}$  s

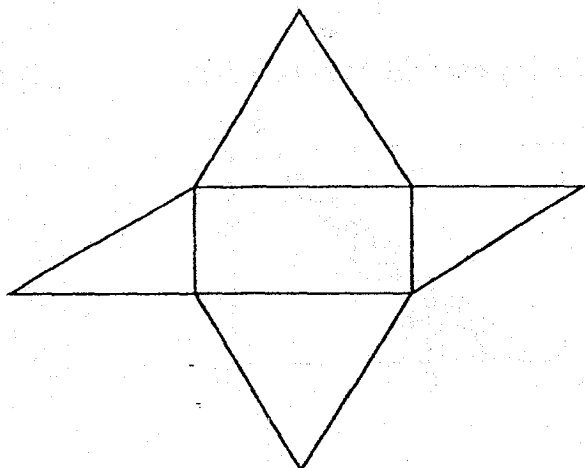
8. Which of the following is a net of the solid?



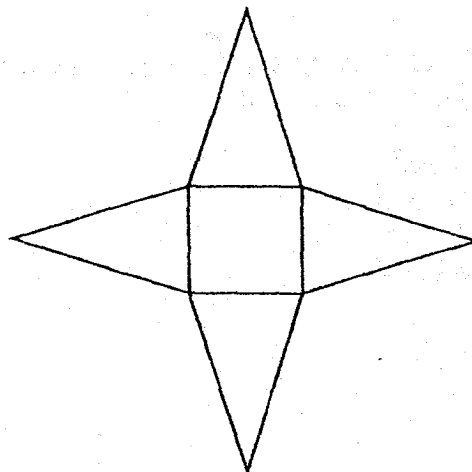
(1)



(2)



(3)



(4)

9. A jar contains 24 red beads, 56 blue beads and 20 green beads. What is the ratio of the number of blue beads to the number of red and green beads?

- (1) 4 : 1
- (2) 7 : 3
- (3) 11 : 14
- (4) 14 : 11

10. Arrange the following numbers from the greatest to the smallest.

$$62\% , 0.63 , \frac{3}{5}$$

(1)  $\frac{3}{5} , 0.63 , 62\%$

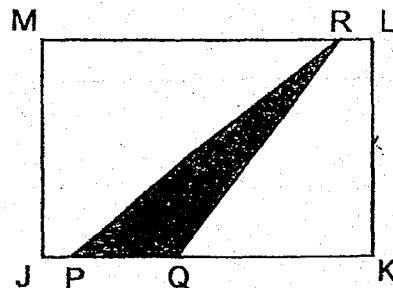
(2)  $62\% , 0.63 , \frac{3}{5}$

(3)  $0.63 , \frac{3}{5} , 62\%$

(4)  $0.63 , 62\% , \frac{3}{5}$

11. JKLM is a rectangle. JK is thrice the length of PQ. The shaded area is  $5 \text{ cm}^2$ . Find the area of JKLM.

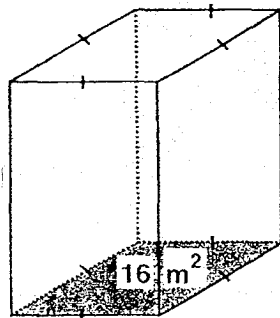
- (1)  $6 \text{ cm}^2$
- (2)  $10 \text{ cm}^2$
- (3)  $15 \text{ cm}^2$
- (4)  $30 \text{ cm}^2$



12. Saleh has \$7. He lends \$3 to his sister and spends \$y. His father gives him twice the amount of money he spends. How much money does Saleh have now?

- (1) \$ (4 + y)
- (2) \$ (4 + 2y)
- (3) \$ (10 + 2y)
- (4) \$ (10 + 3y)


13. The base area of the container is  $16 \text{ m}^2$ . The length of one side of its base is half the height of the container. Find the volume of the container.



- (1)  $1024 \text{ m}^3$
  - (2)  $128 \text{ m}^3$
  - (3)  $64 \text{ m}^3$
  - (4)  $32 \text{ m}^3$
14.  $1 + 2 + 3 + \dots + 23 + 24 + 25$   
When the first 25 whole numbers are added, what is the digit in the ones place of this total?

- (1) 7
- (2) 6
- (3) 3
- (4) 5

15. From the square marked 'X', a chess piece is moved 2 squares northeast and 1 square west. Which of the following is the position of the chess piece now?



- End of Booklet A -





## **2018 PRIMARY 6 PRELIMINARY EXAMINATION**

Name : \_\_\_\_\_ (    )    Date: 1 August 2018

Class : Primary 6 (    )

Time: 8.00 a.m. - 9.00 a.m.

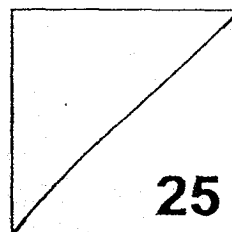
Parent's Signature : \_\_\_\_\_

Paper 1 comprises 2 booklets, A and B.

### **MATHEMATICS**

#### **PAPER 1**

#### **(BOOKLET B)**



#### **INSTRUCTIONS TO CANDIDATE**

1. Write your name, class and register number.
2. Do not turn over this page until you are told to do so.
3. Follow all instructions carefully.
4. Answer all questions.
5. Write your answers in this booklet.
6. You are **not** allowed to use a calculator.

Questions 16 to 20 carry 1 mark each. Write your answers in the spaces provided.  
For questions which require units, give your answers in the units stated. (5 marks)

---

16. Find the value of  $48.3 \div 6$ .

Ans: \_\_\_\_\_

---

17. Simplify  $20n - 3 + 10 - 19n$ .

Ans: \_\_\_\_\_

---

18. Will is 12 years 4 months old. His sister is 3 years and 7 months younger than him. How old is Will's sister?

Ans: \_\_\_\_\_ years \_\_\_\_\_ months

---

19. An insect crawls at a speed of 14 cm/s. Find the time it takes to crawl 700 cm.

Ans: \_\_\_\_\_ s

---

20. The average height of Plant A, Plant B and Plant C is 80 cm. Plant A is 60 cm tall and Plant B is 70 cm tall. What is the height of Plant C?

Ans: \_\_\_\_\_ m

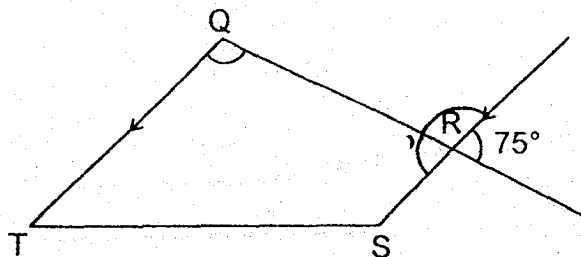
---

Questions 21 to 30 carry 2 marks each. Show your working clearly in the space provided for each question and write your answers in the spaces provided. For questions which require units, give your answers in the units stated. (20 marks)

21. A mug is  $\frac{1}{3}$ -filled with water. Samad pours all the water into a bottle which has a volume twice that of the mug. What fraction of the bottle is filled with water?

Ans: \_\_\_\_\_

22. Find  $\angle TQR$ .



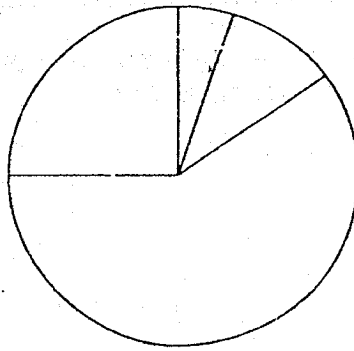
Ans: \_\_\_\_\_ °

23. The table below shows the results of a survey on 500 pupils.


Survey question: How often do you and your family eat out in a week?

Group	Size of group	Response
A	a small number	not at all
B	twice that of Group A	once
C	more than half	twice
D	125 pupils	thrice or more

A pie chart is drawn to represent the results of the survey.  
Write letters A, B, C and D in the correct part of the pie chart.

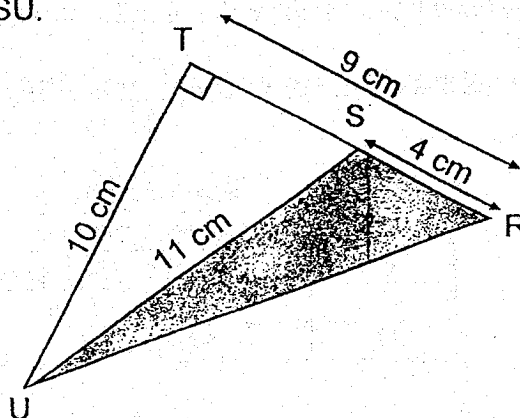


- 
24. What is the difference in length between the pencil and eraser?



Ans: \_\_\_\_\_ cm

25. Find the shaded area of Triangle RSU.

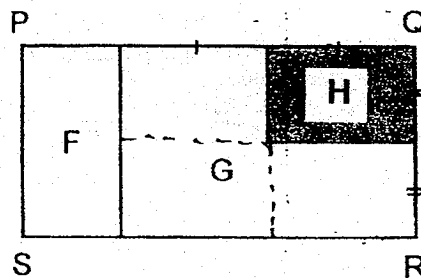


Ans: \_\_\_\_\_  $\text{cm}^2$

26. Lakhi has 80 cards. She buys more cards and has 100 cards now. What is the percentage increase in Lakhi's number of cards?

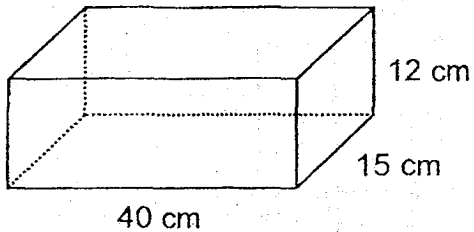
Ans: \_\_\_\_\_ %

27. Rectangle PQRS is made up of Area F, Area G and Area H.  
Area F is  $\frac{1}{4}$  of Rectangle PQRS. What fraction of Rectangle PQRS is shaded?



Ans: \_\_\_\_\_

28. A rectangular tank 40 cm long, 15 cm wide and 12 cm high is filled with 6 l of water. Find the increase in height of the water level when it is filled to the brim.



Ans: \_\_\_\_\_ cm

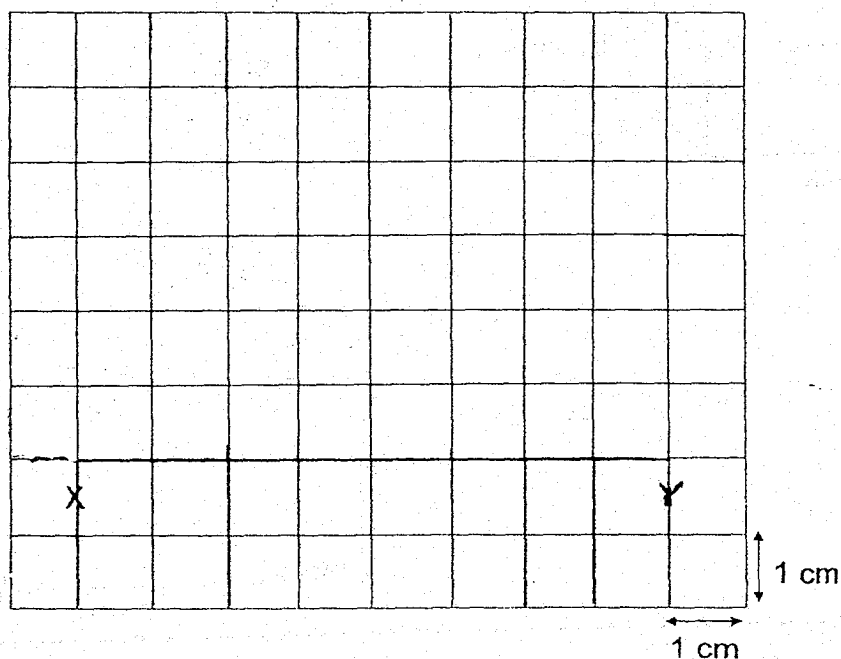
---

29. A number has three decimal places. When rounded to the nearest tenth, the value of the number is 1.3. What is the greatest and smallest possible value of the number?

Ans: greatest - \_\_\_\_\_  
smallest - \_\_\_\_\_

---

30. Using the grid below, draw trapezium WXYZ such that  $\angle XYZ$  is  $45^\circ$  and  $WX = ZW = 4$  cm.



---

End of Booklet B  
End of Paper 1





## **2018 PRIMARY 6 PRELIMINARY EXAMINATION**

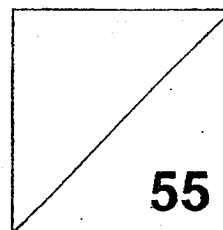
Name : \_\_\_\_\_ (     )     Date: 1 August 2018

Class : Primary 6 (     )

Time: 10.30 a.m. - 12 noon

Parent's Signature : \_\_\_\_\_

### **MATHEMATICS PAPER 2**



#### **INSTRUCTIONS TO CANDIDATE**

1. Write your name, class and register number.
2. Do not turn over this page until you are told to do so.
3. Follow all instructions carefully.
4. Answer all questions.
5. Show your working clearly as marks are awarded for correct working.
6. You are allowed to use a calculator.

Questions 1 to 5 carry 2 marks each. Show your working clearly in the space provided for each question and write your answers in the spaces provided. For questions which require units, give your answers in the units stated. (10 marks)

---

1. There are 105 passengers in a train carriage. The ratio of the number of adults to the number of children is 2 : 1. Then, 15 adults and 10 children alighted from the train. What is the new ratio of the number of adults to the number of children? (Leave your answer in its simplest form)

Ans: \_\_\_\_\_

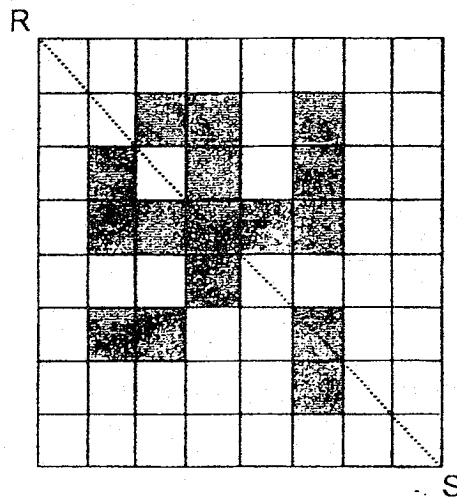
---

2. In a school of 1500 pupils, there are 630 girls.  $\frac{1}{5}$  of the boys and  $\frac{1}{3}$  of the girls do not wear spectacles. How many pupils wear spectacles?

Ans: \_\_\_\_\_

---

3. The figure is made up of identical squares. Shade two more squares so that RS is the line of symmetry for the figure.

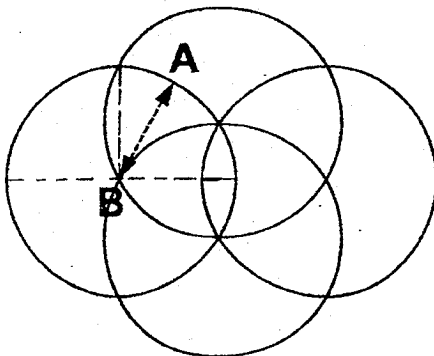


4. Devi bought  $r$  packets of flour. Each packet contained 2 kg of flour. She used 1 kg of flour and gave  $r$  kg of flour to her mother. How much flour was left?

Ans: \_\_\_\_\_ kg

5. The pattern is made up of 4 identical circles. The ink tip of a machine moves a total distance of 44 m to trace out the pattern as shown below. Every part of the pattern is traced only once. Find the distance between A and B.

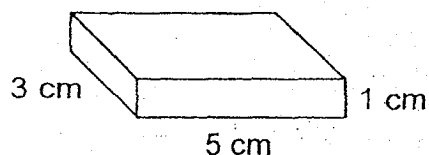
(Take  $\pi = \frac{22}{7}$ )



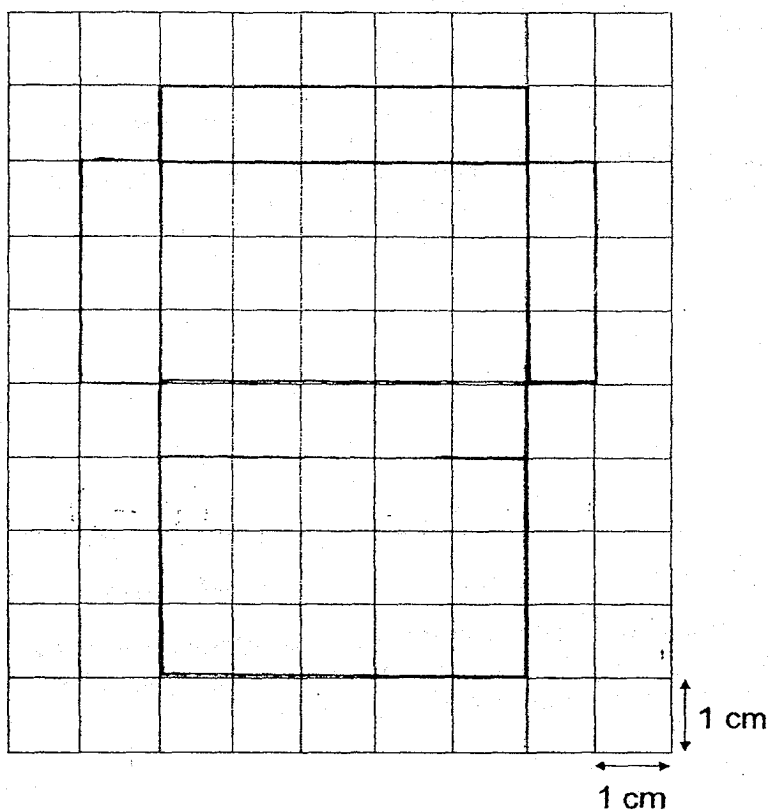
Ans: \_\_\_\_\_ m

For questions 6 to 17, show your working clearly in the space provided for each question and write your answers in the spaces provided.  
The number of marks available is shown in brackets [ ] at the end of each question or part-question. (45 marks)

6. (a) Name the solid below.

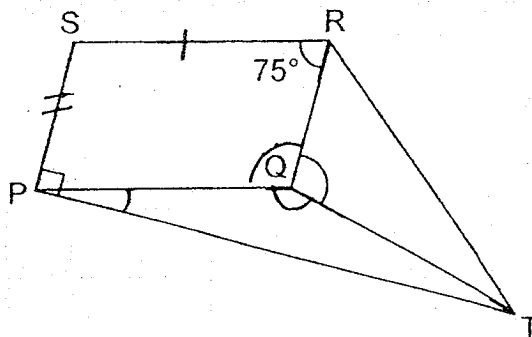


- (b) Complete the net of the solid using the grid. [2]



Ans: (a) \_\_\_\_\_ [1]

7. In the figure, PQRS is a parallelogram.  $PQ = QT$  and  $\angle QRS = 75^\circ$ . Find  $\angle TQR$ .

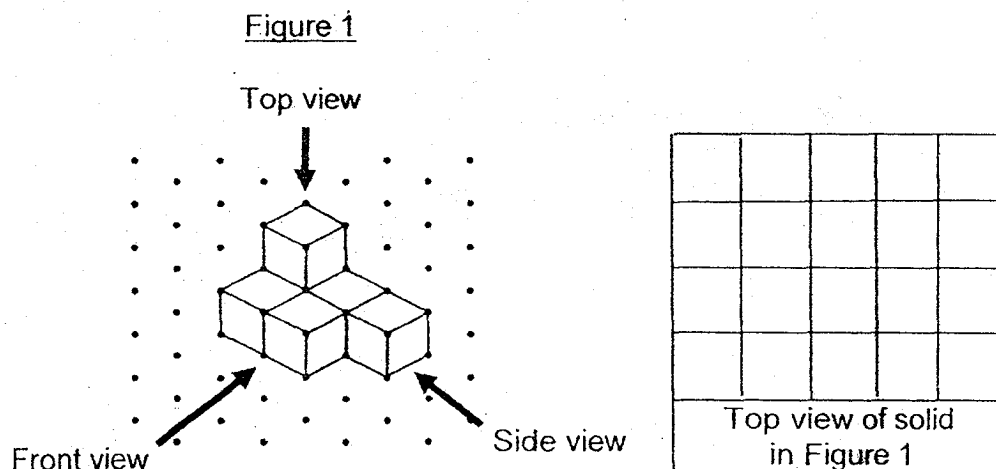


Ans: \_\_\_\_\_ [4]

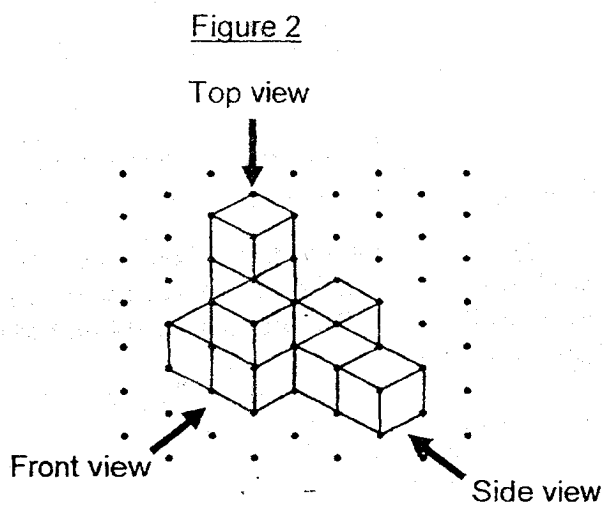
8. The total value of the numbers printed on some cards is 504. Each card is printed with a different 3-digit odd number. The average value of all the numbers is 126. The difference between the greatest and smallest number is 6. Find the smallest number printed on the cards.

Ans: \_\_\_\_\_ [3]

9. The solid as shown in Figure 1 is built using 1-cm cubes.
- (a) Looking at the solid from the front view, draw its top view in the given square grid. [1]



- (b) Identical 1-cm cubes are added to form a new solid as shown in Figure 2.



- (i) How many 1-cm cubes are added to form the new solid?
- (ii) Find the volume of the new solid.

Ans: (b) (i) \_\_\_\_\_ [1]

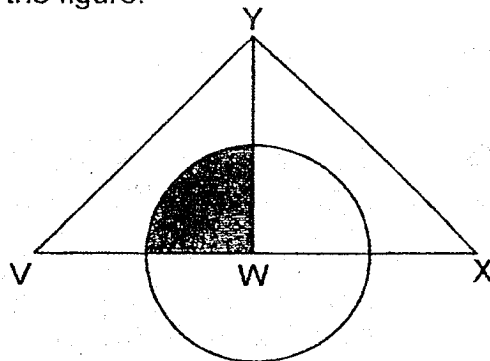
(ii) \_\_\_\_\_ [1]

10. In a 100-metre race, Kane was 2 m behind when Jaah reached the finish line. Jaah's speed was 7 m/s. Find Kane's speed.

Ans: \_\_\_\_\_ [3]

---

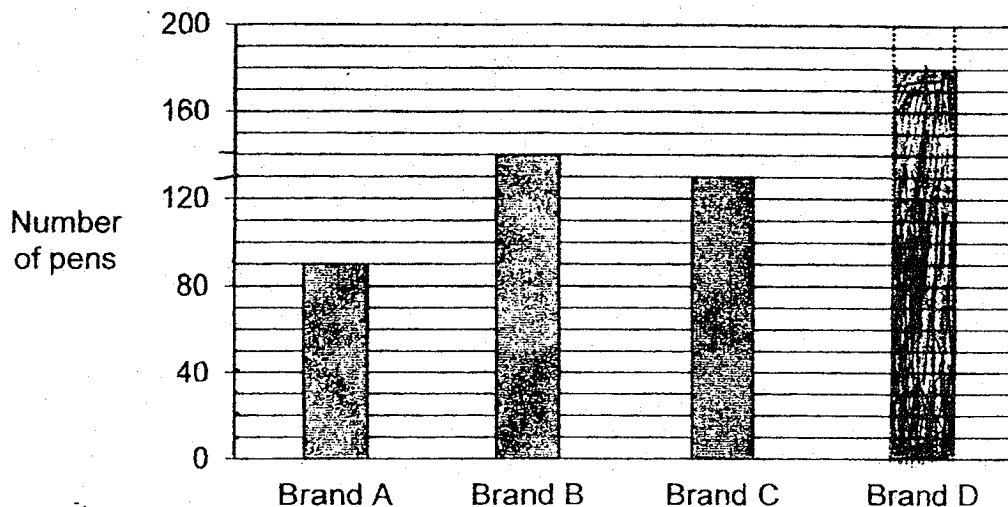
11. The figure is made up of a circle and 2 identical right-angled triangles. W is the centre of the circle.  $\frac{11}{28}$  of Triangle VWY is shaded. Find the ratio of the area that is **not** shaded to the total area of the figure.



Ans: \_\_\_\_\_ [3]

---

12. The bar graph shows the number of each brand of pen sold in a shop.



The prices of the pens are shown in the table below.

Brand	Price per pen
A	\$3.50
B	\$2.40
C	\$2.50
D	\$1.80

- (a) How many Brand B pens were sold?      **Ans:** \_\_\_\_\_ [1]
- (b) There were twice as many Brand D pens as Brand A pens sold.  
Draw the bar to show the number of Brand D pens sold. [1]
- (c) Each statement below is either true, false or not possible to tell from the graph. For each statement, **put a tick (✓)** in the correct column. [2]

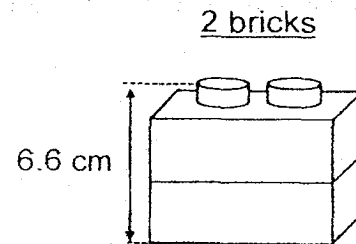
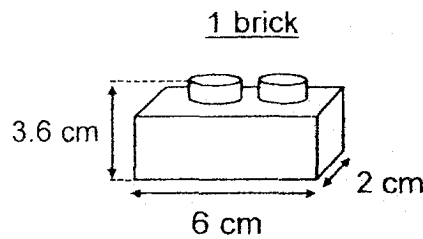
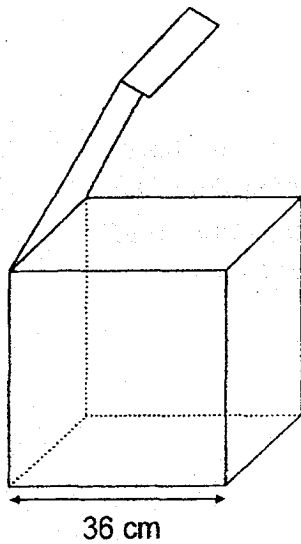
Statement	True	False	Not possible to tell
(i) The greatest amount of money is collected from the sale of Brand B pens.			
(ii) The shop makes the most amount of money from the sale of Brand D pens.			



13. Plastic bricks measuring 6 cm by 2 cm by 3.6 cm each are put into a cubical box with a flap cover.

- (a) How many bricks touch only the base of the box?
- (b) Find the most number of bricks that can be put inside the box such that the cover can be closed completely.




*The diagrams are not drawn to scale.*



Ans: (a) \_\_\_\_\_ [1]

(b) \_\_\_\_\_ [3]

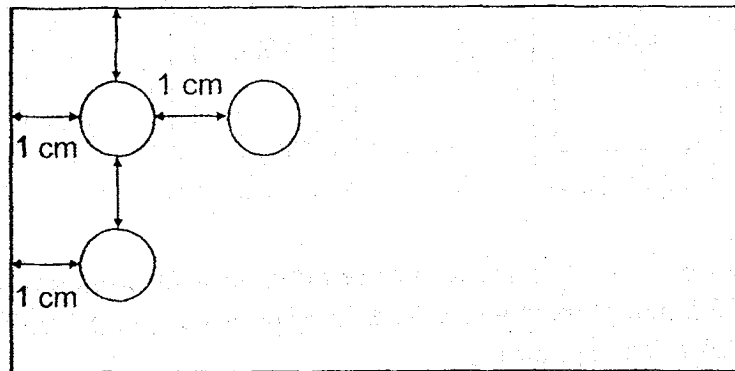
14.

	Small	Medium	Large
			
<b>Capacity</b>	250 ml	500 ml	750 ml

35 l of water is used to fill up bottles of 3 different capacities as shown above. There is an equal number of small-sized bottles and large-sized bottles. The number of medium-sized bottles is three times the number of small-sized bottles. How much water is used to fill up all the medium-sized bottles?

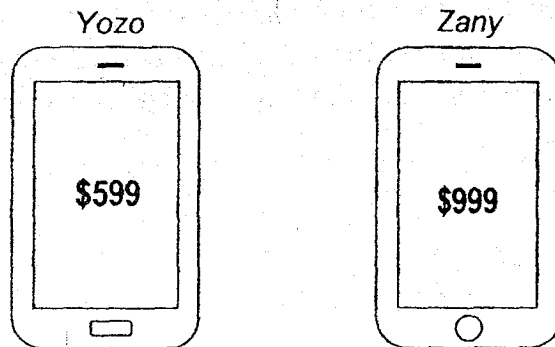
Ans: \_\_\_\_\_ [4]

15. The cardboard, not drawn to scale, has a perimeter of 64 cm. It has holes punched in such a way that each hole has equal distance from the ones around it and from the sides of the cardboard. There are 10 holes along its length. The diameter of each hole is 1 cm. Find the number of holes along its breadth.



Ans: \_\_\_\_\_ [5]

16. Shop A and Shop B sold two types of mobile phones at the prices as shown below.



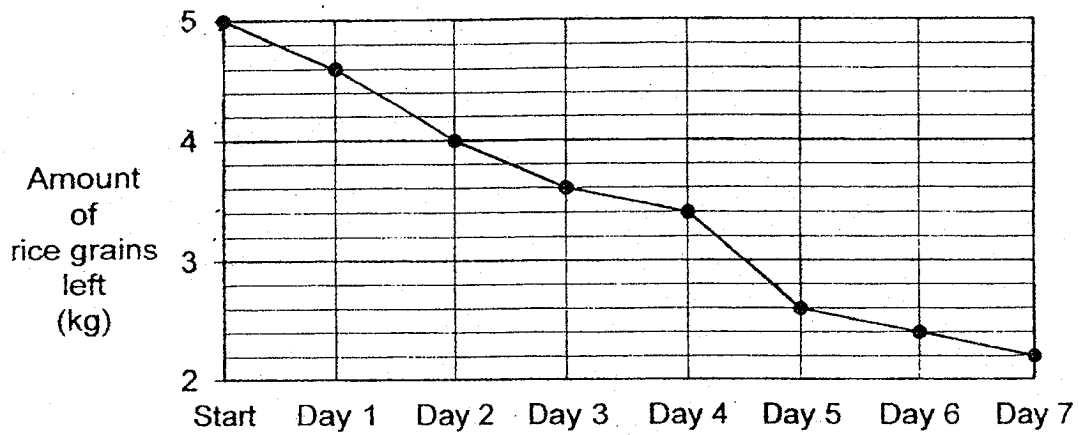
Shop A and Shop B sold the same number of mobile phones last month. Shop A sold 13 Yozo phones and some Zany phones. Shop B sold 15 Zany phones and some Yozo phones. The total amount Shop A collected was \$2000 less than Shop B.

- (a) How many Yozo phones did Shop B sell?
- (b) How much money did Shop A collect?

Ans: (a) \_\_\_\_\_ [3]

(b) \_\_\_\_\_ [2]

17. A housewife buys a 5-kg pack of rice grains. The graph shows the amount of rice grains left at the end of each day for a week.



- (a) On which day was the most amount of rice grains consumed?  
(b) What percentage of the 5-kg pack of rice grains was consumed by Day 3?  
(c) 200 g of rice grains fills 1 measuring cup. How many cups of rice grains were left at the end of Day 7?

Ans: (a) \_\_\_\_\_ [1]

(b) \_\_\_\_\_ [2]

(c) \_\_\_\_\_ [1]



## ANSWER KEY

YEAR : 2018  
LEVEL : PRIMARY 6  
SCHOOL : TAO NAN  
SUBJECT : MATHEMATICS

### Booklet A -Paper 1

Q1	3	Q2	2	Q3	2	Q4	1	Q5	3
Q6	3	Q7	2	Q8	1	Q9	4	Q10	4
Q11	4	Q12	1	Q13	2	Q14	4	Q15	2

### Booklet B -Paper 1

Q16) 8.05

Q17)  $1n - 3 + 10 = n + 7$

Ans:  $n + 7$

Q18) 12 years 4 months = 11 years 16 months

11 years 16 months – 3 years 7 months = 8 years 9 months

Ans: 8 years 9 months

Q19)  $700 \div 14 = 50$

Ams: 50s

Q20)  $80 \times 3 = 240$

$240 - 70 - 60 = 110$

110cm = 1.1m

Ans: 1.1m

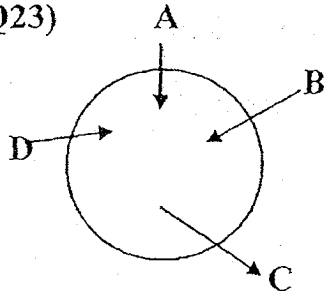
Q21)  $3 \times 2 = 6$

Ans:  $\frac{1}{6}$

Q22)  $\angle TQR = 180^\circ - 75^\circ = 105^\circ$

Ans:  $105^\circ$

Q23)



Q24) Eraser = 6cm

Pencil = 16cm

$16 - 6 = 10$

Ans: 10cm

Q25)  $\frac{1}{2} \times \frac{10}{1} \times \frac{9}{1} = 45$

$9 - 4 = 5$

$\frac{1}{2} \times 5 \times 10 = 25$

$45 - 25 = 20$

Ans:  $20\text{cm}^2$

Q26)  $100 - 80 = 20$

$100\% = 80 \text{ cards}$

$80 \div 100 = 0.8$

$20 \div 0.8 = 20 \div \frac{8}{10} = 20 \times \frac{10}{8} = \frac{200}{8} = 25$

Ans: 25%

Q27)  $\frac{1}{4} \times \frac{3}{4} = \frac{3}{16}$

Ans:  $\frac{3}{16}$

Q28)  $6000 \div 40 \div 15 = 10$



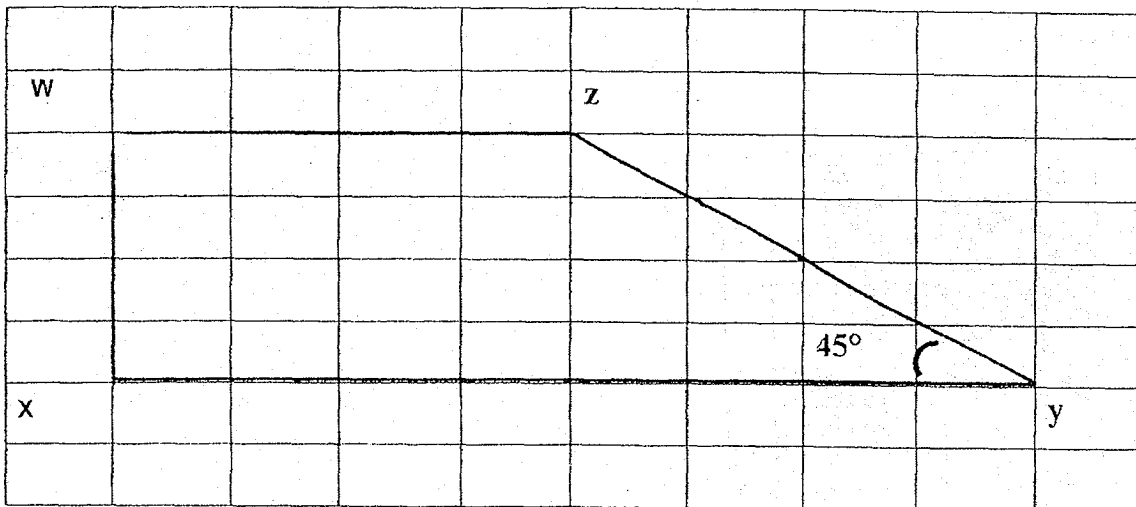
$$12 - 10 = 2$$

Ans: 2cm

Q29) Greatest = 1.349

Smallest = 1.250

Q30)



## Paper 2

Q1)  $105 \div 3 = 35$

$$35 \times 2 = 70$$

A	C
70	35
-15	-10
55	25
11	5

Ans: 11 : 5

Q2)  $\frac{1}{3} \times 630 = 210$

$1500 - 630 = 870$


$\frac{1}{5} \times 870 = 174$

$1500 - 210 - 174 = 1116$

Ans: 1116

Q3)

R



S

Q4)  $r \times 2 = 2r$

$2r - 1 - r = 1r - 1 = (1r - 1) \text{ kg}$

Ans:  $(1r - 1) \text{ kg}$

Q5)  $2 \times \frac{22}{7} \times r \times 4 = \frac{176r}{7}$

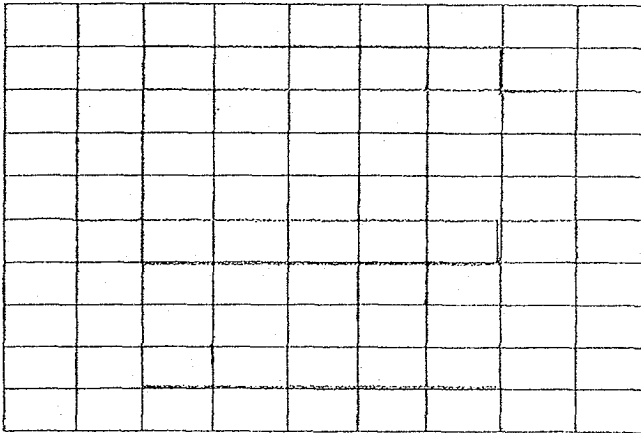
$\frac{176r}{7} = 44$

$R = \frac{44}{176} \times 7 = 1.75$

Ans: 1.75m

Q6a) cuboid

Q6b)



Q7)  $\angle TPQ = 90^\circ - 75^\circ = 15^\circ$

$\angle RSP = \angle RQP = 180^\circ - 75^\circ = 105^\circ$

$\angle PQT = 180^\circ - 15^\circ - 15^\circ = 150^\circ$

$\angle TQR = 360^\circ - 150^\circ - 105^\circ = 105^\circ$

Ans:  $105^\circ$

Q8)  $504 \div 126 = 4$

$6 \div 3 = 2$

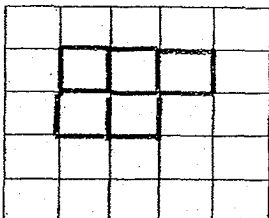
$6 \times 2 = 12$

$504 - 12 = 492$

$492 \div 4 = 123$

Ans: 123

Q9a)



Q9bi) 4

**Q9bii)  $6 + 4 = 10$**

**$1 \times 1 \times 1 = 1$**

**$10 \times 1 = 10$**

**Ans:  $10\text{cm}^3$**

**Q10)  $\frac{100}{7} = 14\frac{2}{7}$**

**$100 - 2 = 98$**

**$98 \div 14\frac{2}{7} = 6.86$**

**Ans:  $6.86\text{m/s}$**

**Q11)  $28 - 11 = 17$**

**$2 \times 17 = 34$**

**$22 + 11 + 17 + 17 = 67$**

**$67 + 11 = 78$**

**NS : TA**

**$67 : 78$**

**Ans:  $67 : 78$**

**Q12a) 140**

**Q12b) Draw till 180**

**Q12ci) True**

**Q12cii) Not possible to tell**

**Q13a)  $36 \div 6 = 6$**

**$36 \div 2 = 18$**

**$6 \times 18 = 108$**

**Ans: 108**

Q13b)  $6.6 - 3.6 = 3$

$$36 \div 3 = 12$$

$$12 - 1 = 11$$

$$108 \times 11 = 1188$$

Ans: 1188

Q14)  $250u + 3u \times 500 + 750u = 35000$

$$250u + 1500u + 750u = 35000$$

$$2500u = 35000$$

$$U = 35000 \div 2500 = 14$$

$$3u = 3 \times 14 = 42$$

$$42 \times 500\text{ml} = 21000 = 21\ell$$

Ans: 21 ℓ

Q15)  $64 \div 2 = 32$

$$10 \text{ holes} \rightarrow 10 \times 1\text{cm} = 10\text{cm}$$

10holes, 11 gaps = Length

$$11 \text{ gaps} \rightarrow 11 \times 1 = 11\text{cm}$$

$$10\text{cm} + 11\text{cm} = 21\text{cm}$$

$$13 = 32 - 21 = 11\text{cm}$$

$$13 \text{ minus 1 gap at one end} - 11 - 1 = 10$$

$$1 \text{ gap} + 1 \text{ hole} = 1 + 1 = 2\text{cm}$$

$$\text{Number of sets} = 10 \div 2 = 5$$

Ans: 5cm

Q16a)  $A = 13 \times 599 = 7787$

$$B = 15 \times 999 = 14985$$

Shop A and B sold same number of phones.

$$\$999 - \$599 = \$400$$

$$\$2000 \div 400 = 5 \text{ less Zany phone}$$

$$15 - 5 = 10$$

$$13 + 10 = 23$$

$$23 - 15 = 8$$

Ans: 8

$$\text{Q16b) } 999 \times 15 = 14985$$

$$599 \times 13 = 7787$$

$$8 \times 599 = 4792$$

$$14985 + 4792 = 19777$$

$$10 \times 999 = 9990$$

$$9990 + 7787 = 17777$$

$$19777 - 17777 = 2000$$

Ans: \$17.777

$$\text{Q17a) Day 5}$$

$$\text{Q17b) } 5 - 3.6 = 1.4$$

$$\frac{1.4}{5} \times 100\% = 28\%$$

Ans: 28%

$$\text{Q17c) } 2.2\text{kg} = 2200\text{g}$$

$$2200 \div 200 = 11$$

Ans: 11

END