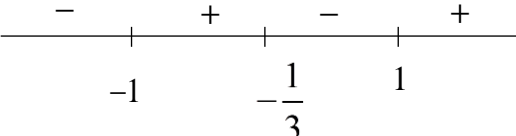


1	$\frac{4x^2 + 7x + 1}{3x + 1} \leq x + 2$ $\frac{4x^2 + 7x + 1 - (x + 2)(3x + 1)}{3x + 1} \leq 0$ $\frac{4x^2 + 7x + 1 - (3x^2 + x + 6x + 2)}{3x + 1} \leq 0$ $\frac{x^2 - 1}{3x + 1} \leq 0$ $\frac{(x - 1)(x + 1)}{3x + 1} \leq 0$  $\therefore x \leq -1 \text{ or } -\frac{1}{3} < x \leq 1$ $\frac{4x + 7\sqrt{x} + 1}{3\sqrt{x} + 1} \leq \sqrt{x} + 2$ <p>Replace x with \sqrt{x},</p> $\therefore \sqrt{x} \leq -1 \quad \text{or} \quad -\frac{1}{3} < \sqrt{x} \leq 1$ <p>(rejected as $\sqrt{x} \geq 0$)</p> <p>Since $\sqrt{x} \geq 0$,</p> $-\frac{1}{3} < \sqrt{x} \leq 1 \Rightarrow 0 \leq \sqrt{x} \leq 1$ $0 \leq x \leq 1$
2	<p>(i)</p> $\int n \cos^{-1}(nx) \, dx$ $= (nx) \cos^{-1}(nx) - \int (nx) \left(-\frac{n}{\sqrt{1 - (nx)^2}} \right) dx$ $= (nx) \cos^{-1}(nx) - \frac{1}{2} \int (-2n^2 x) (1 - n^2 x^2)^{-1/2} dx$ $= (nx) \cos^{-1}(nx) - \frac{1}{2} \times \frac{(1 - n^2 x^2)^{1/2}}{\frac{1}{2}} + C$ $= (nx) \cos^{-1}(nx) - \sqrt{1 - n^2 x^2} + C$

	<p>(ii)</p> $\int_0^{\frac{1}{2n}} n \cos^{-1}(nx) \, dx$ $= \left[(nx) \cos^{-1}(nx) - \sqrt{1-n^2x^2} \right]_0^{\frac{1}{2n}}$ $= \left[\frac{1}{2} \cos^{-1} \frac{1}{2} - \sqrt{1-\frac{1}{4}} \right] - (0-1)$ $= \frac{\pi}{6} - \frac{\sqrt{3}}{2} + 1 \quad \text{or} \quad \frac{\pi}{6} + \frac{2-\sqrt{3}}{2}$
3	<p>(i)</p> $(2\mathbf{p} - 5\mathbf{q}) \times (2\mathbf{p} + 5\mathbf{q}) = 4\mathbf{p} \times \mathbf{p} + 10\mathbf{p} \times \mathbf{q} - 10\mathbf{q} \times \mathbf{p} - 25\mathbf{q} \times \mathbf{q}$ $= 20\mathbf{p} \times \mathbf{q}$ $= 20 \begin{pmatrix} 2 \\ 1 \\ a \end{pmatrix} \times \begin{pmatrix} b \\ 1 \\ 0 \end{pmatrix}$ $= 20 \begin{pmatrix} -a \\ ab \\ 2-b \end{pmatrix}$ <p>Alternative:</p> $(2\mathbf{p} - 5\mathbf{q}) \times (2\mathbf{p} + 5\mathbf{q}) = \left(2 \begin{pmatrix} 2 \\ 1 \\ a \end{pmatrix} - 5 \begin{pmatrix} b \\ 1 \\ 0 \end{pmatrix} \right) \times \left(2 \begin{pmatrix} 2 \\ 1 \\ a \end{pmatrix} + 5 \begin{pmatrix} b \\ 1 \\ 0 \end{pmatrix} \right)$ $= \begin{pmatrix} 4-5b \\ -3 \\ 2a \end{pmatrix} \times \begin{pmatrix} 4+5b \\ 7 \\ 2a \end{pmatrix}$ $= \begin{pmatrix} -6a-14a \\ -(8a-10ab-8a-10ab) \\ 28-35b+12+15b \end{pmatrix}$ $= \begin{pmatrix} -20a \\ 20ab \\ 40-20b \end{pmatrix} = 20 \begin{pmatrix} -a \\ ab \\ 2-b \end{pmatrix}$ <p>Given that the i- and j- components of the vector $20 \begin{pmatrix} -a \\ ab \\ 2-b \end{pmatrix}$ are equal,</p> $-a = ab$ $ab + a = 0$ $a(b+1) = 0$ <p>Since $a \neq 0$, thus $b = -1$</p>

(ii)

$$|(2\mathbf{p} - 5\mathbf{q}) \times (2\mathbf{p} + 5\mathbf{q})| = 80$$

$$\left| 20 \begin{pmatrix} -a \\ ab \\ 2-b \end{pmatrix} \right| = 80$$

$$\left| \begin{pmatrix} -a \\ -a \\ 2+1 \end{pmatrix} \right| = 4$$

$$\sqrt{2a^2 + 9} = 4$$

$$2a^2 + 9 = 16$$

$$a^2 = \frac{7}{2}$$

$$a = \pm \sqrt{\frac{7}{2}} \text{ or } \pm \frac{\sqrt{14}}{2}$$

(iii)

Since $2\mathbf{p} - 5\mathbf{q}$ and $2\mathbf{p} + 5\mathbf{q}$ are perpendicular,

$$(2\mathbf{p} - 5\mathbf{q}) \cdot (2\mathbf{p} + 5\mathbf{q}) = 0$$

$$4|\mathbf{p}|^2 - 25|\mathbf{q}|^2 = 0$$

$$|\mathbf{p}|^2 = \frac{25}{4}|\mathbf{q}|^2$$

$$= \frac{25}{4}((-1)^2 + 1^2)$$

$$= \frac{25}{2}$$

$$|\mathbf{p}| = \frac{5\sqrt{2}}{2}$$

Alternative:

$$(2\mathbf{p} - 5\mathbf{q}) \cdot (2\mathbf{p} + 5\mathbf{q}) = \begin{pmatrix} 4+5 \\ -3 \\ 2a \end{pmatrix} \cdot \begin{pmatrix} 4-5 \\ 7 \\ 2a \end{pmatrix}$$

$$= 16 - 25 - 21 + 4a^2$$

$$= 4a^2 - 30$$

Since $2\mathbf{p} - 5\mathbf{q}$ and $2\mathbf{p} + 5\mathbf{q}$ are perpendicular,

$$(2\mathbf{p} - 5\mathbf{q}) \cdot (2\mathbf{p} + 5\mathbf{q}) = 0$$

$$4a^2 - 30 = 0$$

$$a^2 = \frac{15}{2}$$

$$|\mathbf{p}| = \sqrt{2^2 + 1 + a^2} = \sqrt{5 + \frac{15}{2}} = \sqrt{\frac{25}{2}} = \frac{5\sqrt{2}}{2}$$

(a)

Method 1

Since the coefficients are real, $w = 2 + i$ is another root of the equation.

$$\begin{aligned}(w - 2 + i)(w - 2 - i) &= (w - 2)^2 - (i)^2 \\ &= w^2 - 4w + 4 + 1 \\ &= w^2 - 4w + 5\end{aligned}$$

$$w^3 + pw^2 + qw + 30 = 0$$

$$(w^2 - 4w + 5)(w + 6) = 0 \quad (\text{By inspection})$$

Comparing coefficients of w^2 , $p = 6 - 4 = 2$

Comparing coefficients of w , $q = -24 + 5 = -19$

Method 2

Substitute $w = 2 - i$ (or $w = 2 + i$) into the given eqn,

$$\begin{aligned}(2 - i)^3 + p(2 - i)^2 + q(2 - i) + 30 &= 0 \\ (3 - 4i)(2 - i) + p(3 - 4i) + q(2 - i) + 30 &= 0 \\ (6 - 3i - 8i - 4) + p(3 - 4i) + q(2 - i) + 30 &= 0 \\ (32 + 3p + 2q) + (-11 - 4p - q)i &= 0\end{aligned}$$

Comparing the real parts, $3p + 2q = -32$ --- (1)

Comparing the imaginary parts, $4p + q = -11$ ---- (2)

$$\begin{aligned}(1) - (2) \times 2: 3p - 8p &= -32 + 11 \times 2 \\ -5p &= -10 \\ p &= 2\end{aligned}$$

From (2): $q = -11 - 4 \times 2 = -19$

$$\therefore p = 2, q = -19$$

(b)

Substitute $z = 3 + ui$ into the given eqn,

$$\begin{aligned}(3 + ui)^2 + (-5 + 2i)(3 + ui) + (21 - i) &= 0 \\ 9 + 6ui - u^2 - 15 - 5ui + 6i - 2u + 21 - i &= 0 \\ (15 - 2u - u^2) + (u + 5)i &= 0\end{aligned}$$

Compare imaginary coefficient: $u + 5 = 0$
 $u = -5$

$$\therefore z = 3 - 5i$$

[Note: if using $15 - 2u - u^2 = 0$, need to reject $u = 3$]

Method 1

Let the other root be w .

$$z^2 + (-5 + 2i)z + (21 - i) = (z - 3 + 5i)(z - w)$$

Comparing coefficients of z ,

$$-5 + 2i = -w - 3 + 5i$$

$$w = 2 + 3i$$

Method 2

Let the other solution be $a + bi$,

$$z^2 + (-5 + 2i)z + (21 - i)$$

$$= (z - (3 - 5i))(z - (a + bi))$$

$$= z^2 - (a + bi)z - (3 - 5i)z + (3 - 5i)(a + bi)$$

$$= z^2 - [a + 3 + (b - 5)i]z + (3 - 5i)(a + bi)$$

Compare the z term: $-(a + 3) = -5 \Rightarrow a = 2$

$$-(b - 5) = 2 \Rightarrow b = 3$$

$\therefore z = 2 + 3i$ is another root.

5

(i)

$$\sum_{n=2}^N \frac{2}{n(n-1)^2(n+1)^2}$$

$$= \sum_{n=2}^N [u_n - u_{n+1}]$$

$$= \begin{bmatrix} (u_2 - u_3) \\ + (u_3 - u_4) \\ + (u_4 - u_5) \\ \dots \\ \dots \\ + (u_{N-1} - u_N) \\ + (u_N - u_{N+1}) \end{bmatrix}$$

$$= u_2 - u_{N+1}$$

$$= \frac{1}{2(2^2)(2-1)^2} - \frac{1}{2(N+1)^2((N-1)+1)^2}$$

$$= \frac{1}{8} - \frac{1}{2N^2(N+1)^2}$$

(ii)

$$\text{As } N \rightarrow \infty, \frac{1}{2N^2(N+1)^2} \rightarrow 0$$

$$\sum_{n=2}^{\infty} \frac{2}{n(n-1)^2(n+1)^2} \rightarrow \frac{1}{8} \text{ which is a constant, hence it is a convergent series.}$$

$$\begin{aligned} \sum_{n=2}^{\infty} \frac{2}{n(n-1)^2(n+1)^2} &= \frac{1}{8} - 0 \\ &= \frac{1}{8} \end{aligned}$$

	<p>(iii)</p> <p>Method 1</p> $\begin{aligned} \sum_{n=1}^N \frac{2N}{(n+1)n^2(n+2)^2} &= N \sum_{n=1}^N \frac{2}{(n+1)n^2(n+2)^2} \\ &= N \sum_{n=2}^{N+1} \frac{2}{(n)(n-1)^2(n+1)^2} \\ &= N \left[\frac{1}{8} - \frac{1}{2(N+1)^2(N+2)^2} \right] \\ &= \frac{N}{8} \left[1 - \frac{4}{(N+1)^2(N+2)^2} \right] \end{aligned}$ <p>Method 2 By listing the terms</p> $\begin{aligned} \sum_{n=2}^N \frac{2}{n(n-1)^2(n+1)^2} &= \frac{2}{2(1)^2(3)^2} + \frac{2}{3(2)^2(4)^2} + \cdots + \frac{2}{N(N-1)^2(N+1)^2} \\ \sum_{n=1}^N \frac{2N}{(n+1)n^2(n+2)^2} &= N \left[\frac{2}{2(1)^2(3)^2} + \frac{2}{3(2)^2(4)^2} + \cdots + \frac{2}{(N+1)(N)^2(N+2)^2} \right] \\ &= N \sum_{n=2}^{N+1} \frac{2}{n(n-1)^2(n+1)^2} \\ &= N \left[\frac{1}{8} - \frac{1}{2(N+1)^2(N+2)^2} \right] \\ &= \frac{N}{8} \left[1 - \frac{4}{(N+1)^2(N+2)^2} \right] \end{aligned}$
6	<p>(i)</p> $(x+y) \frac{dy}{dx} + ky = 2 \quad \dots (1)$ <p>Differentiating (1) w.r.t. x:</p> $(x+y) \frac{d^2y}{dx^2} + \left(1 + \frac{dy}{dx}\right) \frac{dy}{dx} + k \frac{dy}{dx} = 0$ $(x+y) \frac{d^2y}{dx^2} + (1+k) \frac{dy}{dx} + \left(\frac{dy}{dx}\right)^2 = 0 \quad \dots (2)$

	<p>Differentiating (2) w.r.t. x:</p> $(x+y)\frac{d^3y}{dx^3} + \left(1 + \frac{dy}{dx}\right)\frac{d^2y}{dx^2} + (1+k)\frac{d^2y}{dx^2} + 2\left(\frac{dy}{dx}\right)\left(\frac{d^2y}{dx^2}\right) = 0$ $(x+y)\frac{d^3y}{dx^3} + \left(2 + 3\frac{dy}{dx} + k\right)\frac{d^2y}{dx^2} = 0$ <p>$x=0, \quad y=1: \quad \frac{dy}{dx} = 2-k$</p> $\frac{d^2y}{dx^2} = 3k-6$ $\frac{d^3y}{dx^3} = 6k^2 - 36k + 48 = 6(k^2 - 6k + 8)$ $\therefore y = 1 + (2-k)x + \left(\frac{3k-6}{2!}\right)x^2 + \left(\frac{6(k^2-6k+8)}{3!}\right)x^3 + \dots$ $= 1 + (2-k)x + \left(\frac{3k-6}{2}\right)x^2 + (k^2-6k+8)x^3 + \dots$ <p>(ii)</p> $\sin\left(2x + \frac{\pi}{2}\right) = \sin 2x \cos \frac{\pi}{2} + \cos 2x \sin \frac{\pi}{2} = \cos 2x$ $\frac{1}{\sin^2\left(x + \frac{\pi}{2}\right)} = \frac{1}{\cos^2 2x}$ $\approx \left(1 - \frac{(2x)^2}{2}\right)^{-2}$ $= (1 - 2x^2)^{-2}$ $= 1 + 4x^2 + \dots$ $4 = 2\left(\frac{3k-6}{2}\right)$ $k = \frac{10}{3}$
7	<p>(i) $\frac{dM}{dt} = k(100^2 - M^2)$, $k > 0$</p> <p>Since $\frac{dM}{dt} > 0$ and $M > 0$, $\Rightarrow (100^2 - M^2) > 0$ and $0 < M < 100$</p> $\int \frac{1}{(100^2 - M^2)} dM = \int k dt$ $\frac{1}{200} \ln\left(\frac{100+M}{100-M}\right) = kt + C$

$$\ln\left(\frac{100+M}{100-M}\right) = 200kt + C'$$

$$\frac{100+M}{100-M} = Ae^{200kt}, \text{ where } A = e^{C'}$$

$$\text{When } t = 0, M = 5 \Rightarrow A = \frac{105}{95} = \frac{21}{19}$$

$$\text{When } t = 5, M = 20 \Rightarrow \frac{3}{2} = \frac{21}{19}e^{1000k}$$

$$e^{1000k} = \frac{19}{14} \text{ or } 200k = \frac{1}{5} \ln\left(\frac{19}{14}\right)$$

$$\text{Thus } \frac{100+M}{100-M} = \frac{21}{19} \left(e^{1000k}\right)^{\frac{t}{5}} = \frac{21}{19} \left(\frac{19}{14}\right)^{\frac{t}{5}}$$

$$100+M = \frac{21}{19} \left(\frac{19}{14}\right)^{\frac{t}{5}} (100-M)$$

$$M \left[\frac{21}{19} \left(\frac{19}{14}\right)^{\frac{t}{5}} + 1 \right] = 100 \left[\frac{21}{19} \left(\frac{19}{14}\right)^{\frac{t}{5}} - 1 \right]$$

$$M = \frac{100 \left[\frac{21}{19} \left(\frac{19}{14}\right)^{\frac{t}{5}} - 1 \right]}{\frac{21}{19} \left(\frac{19}{14}\right)^{\frac{t}{5}} + 1} \text{ OR } \frac{100 \left[21 \left(\frac{19}{14}\right)^{\frac{t}{5}} - 19 \right]}{21 \left(\frac{19}{14}\right)^{\frac{t}{5}} + 19} \text{ OR } \frac{100 \left[\left(\frac{19}{14}\right)^{\frac{t}{5}} - \frac{19}{21} \right]}{\left(\frac{19}{14}\right)^{\frac{t}{5}} + \frac{19}{21}}$$

(ii)

$$\text{When } t = 15, M = \frac{100 \left[\frac{21}{19} \left(\frac{19}{14}\right)^3 - 1 \right]}{\frac{21}{19} \left(\frac{19}{14}\right)^3 + 1} = 46.847$$

$M \approx 47$ (nearest whole number)

(iii)

Method 1: Graphical Method

Sketch the graphs of $M=f(t)$ and $M=80$

From the graph, when $t > 34.336397$, $M > 80$

Least number of days required is 35.

Method 2: Use GC table

When $t = 34$, $M = 79.627 < 80$

When $t = 35$, $M = 80.718 > 80$

When $t = 36$, $M = 81.756 > 80$

$$\Rightarrow t \geq 35$$

Thus least number of days required is 35.

Method 3:

$$100 \left[\frac{21}{19} \left(\frac{19}{14} \right)^{\frac{t}{5}} - 1 \right] > 80$$

$$\frac{21}{19} \left(\frac{19}{14} \right)^{\frac{t}{5}} + 1$$

$$\frac{5}{4} \left[\frac{21}{19} \left(\frac{19}{14} \right)^{\frac{t}{5}} - 1 \right] > \frac{21}{19} \left(\frac{19}{14} \right)^{\frac{t}{5}} + 1$$

$$\frac{1}{4} \cdot \frac{21}{19} \left(\frac{19}{14} \right)^{\frac{t}{5}} > \frac{9}{4}$$

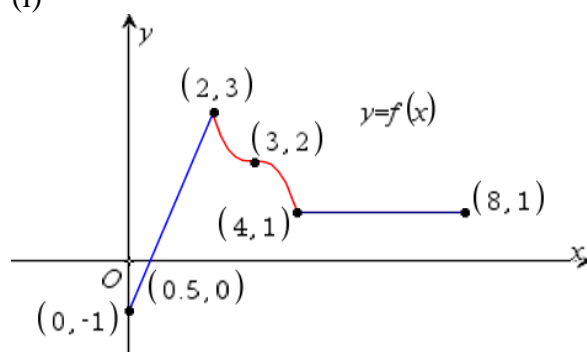
$$\left(\frac{19}{14} \right)^{\frac{t}{5}} > \frac{57}{7}$$

$$t > \frac{5 \ln \left(\frac{57}{7} \right)}{\ln \left(\frac{19}{14} \right)} = 34.336397$$

Least number of days required is 35.

8

(i)

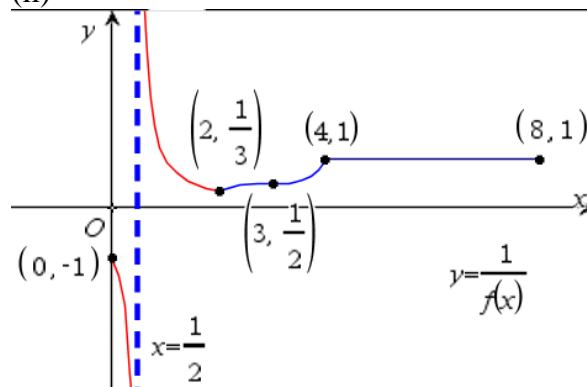


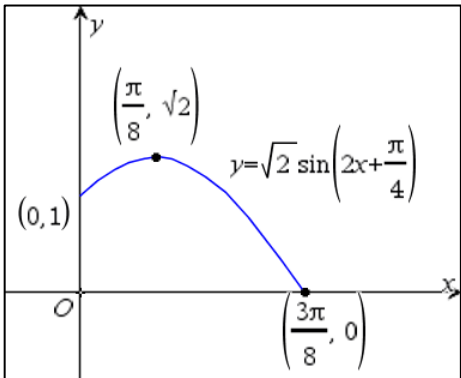
Range of f is $[-1, 3]$

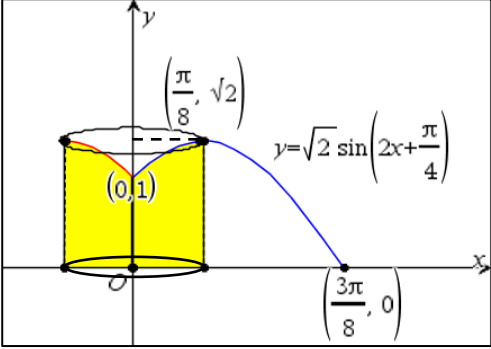
or $R_f = [-1, 3]$

or $R_f = \{y : -1 \leq y \leq 3\}$

(ii)



	<p>(iii)</p> $\int_{-6}^{-4} f(-x) \, dx = \int_4^6 f(x) \, dx$ <p>= area of rectangle</p> <p>= 2</p>
9	<p>$f(x) = \sin 2x + \cos 2x$</p> $R = \sqrt{1^2 + 1^2} = \sqrt{2}$ $\tan \alpha = 1 \Rightarrow \alpha = \frac{\pi}{4}$ $f(x) = \sin 2x + \cos 2x = \sqrt{2} \sin\left(2x + \frac{\pi}{4}\right)$ <p>(i)</p> <p>Transforming $y = \sin x$ to $y = \sqrt{2} \sin\left(2x + \frac{\pi}{4}\right)$</p> <p>Sequence of Transformation:</p> <p>Either</p> <p>A: A translation of $\frac{\pi}{4}$ units in the negative x-direction</p> <p>B: A scaling/stretch with scale factor $\frac{1}{2}$ parallel to the x-axis.</p> <p>C: A scaling/stretch with scale factor $\sqrt{2}$ parallel to the y-axis.</p> <p><u>Acceptable sequence: ABC, ACB, CAB.</u></p> <p>OR $y = \sqrt{2} \sin\left[2\left(x + \frac{\pi}{8}\right)\right]$</p> <p>D: A scaling/stretch with scale factor $\frac{1}{2}$ parallel to the x-axis.</p> <p>E: A translation of $\frac{\pi}{8}$ units in the negative x-direction.</p> <p>F: A scaling/stretch with scale factor $\sqrt{2}$ parallel to the y-axis.</p> <p><u>Acceptable sequence: DEF, DFE, FDE</u></p> <p>(ii)</p> <p>Max point occurs when $\sin\left(2x + \frac{\pi}{4}\right) = 1$</p> $\Rightarrow \left(2x + \frac{\pi}{4}\right) = \frac{\pi}{2}$ $\Rightarrow x = \frac{\pi}{8}, y = \sqrt{2}$ 

	<p>(iii)</p> $y = \sqrt{2} \sin\left(2x + \frac{\pi}{4}\right)$ <p>The curve is one-one thus inverse function</p> $\sin\left(2x + \frac{\pi}{4}\right) = \frac{y}{\sqrt{2}}$ $2x + \frac{\pi}{4} = \sin^{-1} \frac{y}{\sqrt{2}}$ $x = \frac{1}{2} \left[\sin^{-1} \left(\frac{y}{\sqrt{2}} \right) - \frac{\pi}{4} \right]$ <p>Volume = Volume of cylinder - $\pi \int_1^{\sqrt{2}} x^2 dy$</p> $= \pi \left(\frac{\pi}{8} \right)^2 \sqrt{2} - \pi \int_1^{\sqrt{2}} \frac{1}{4} \left[\sin^{-1} \left(\frac{y}{\sqrt{2}} \right) - \frac{\pi}{4} \right]^2 dy$ $= 0.6506458$ $\approx 0.6506 \text{ (4 d.p.)}$ <div style="display: flex; align-items: center; justify-content: space-around;">  <div style="text-align: right;"> <p>for $0 \leq x \leq \frac{\pi}{8}$, exists.</p> </div> </div>
10	<p>(i)</p> $\vec{AB} = \begin{pmatrix} 0 \\ 0 \\ 2 \end{pmatrix} - \begin{pmatrix} 1 \\ 2 \\ 2 \end{pmatrix} = \begin{pmatrix} -1 \\ -2 \\ 0 \end{pmatrix}$ $l_{AB}: \underline{r} = \begin{pmatrix} 1 \\ 2 \\ 2 \end{pmatrix} + \lambda \begin{pmatrix} 1 \\ 2 \\ 0 \end{pmatrix} \text{ or } \underline{r} = \begin{pmatrix} 0 \\ 0 \\ 2 \end{pmatrix} + \lambda \begin{pmatrix} 1 \\ 2 \\ 0 \end{pmatrix}, \lambda \in \mathbb{R} \text{ or equivalent}$ <p>(ii)</p> $\sin \theta = \frac{\left \begin{pmatrix} 1 \\ 2 \\ 0 \end{pmatrix} \cdot \begin{pmatrix} 1 \\ 0 \\ 1 \end{pmatrix} \right }{\sqrt{5}\sqrt{2}} = \frac{1}{\sqrt{10}}$ $\theta = 18.4^\circ$ <p>(iii)</p> <p>Let \underline{m} be a vector perpendicular to the plane containing the light ray and \underline{n}.</p> $\underline{m} = \underline{n} \times \vec{AB} = \begin{pmatrix} 1 \\ 0 \\ 1 \end{pmatrix} \times \begin{pmatrix} -1 \\ -2 \\ 0 \end{pmatrix} = \begin{pmatrix} 2 \\ -1 \\ -2 \end{pmatrix} \text{ or } \begin{pmatrix} 1 \\ 0 \\ 1 \end{pmatrix} \times \begin{pmatrix} 1 \\ 2 \\ 0 \end{pmatrix} = \begin{pmatrix} -2 \\ 1 \\ 2 \end{pmatrix}$

$$\cos 45^\circ = \frac{1}{\sqrt{2}} = \frac{\begin{pmatrix} -\frac{2}{3} \\ p \\ q \end{pmatrix} \cdot \begin{pmatrix} -1 \\ 0 \\ -1 \end{pmatrix}}{\sqrt{2}} \Rightarrow \frac{2}{3} - q = 1$$

$$q = -\frac{1}{3}$$

$$\begin{pmatrix} -\frac{2}{3} \\ p \\ q \end{pmatrix} \cdot \vec{m} \Rightarrow \begin{pmatrix} -\frac{2}{3} \\ p \\ -\frac{1}{3} \end{pmatrix} \cdot \begin{pmatrix} 2 \\ -1 \\ -2 \end{pmatrix} = 0$$

$$-\frac{4}{3} - p + \frac{2}{3} = 0 \Rightarrow p = -\frac{2}{3}$$

(iv)

Glass upper surface is $x + z = 2$

Glass bottom surface is $3x + 3z = -4 \Rightarrow x + z = -\frac{4}{3}$

$$\text{Distance between two planes} = \frac{\left| 2 - \left(-\frac{4}{3} \right) \right|}{\sqrt{2}} = \frac{10}{3\sqrt{2}} = \frac{5\sqrt{2}}{3}$$

Thickness of the glass object is $\frac{5\sqrt{2}}{3}$ cm

(v)

Let the point at which the light ray leaves the glass object be F .

Method 1:

$$l_{BF} : \vec{r} = \begin{pmatrix} 0 \\ 0 \\ 2 \end{pmatrix} + \mu \begin{pmatrix} 2 \\ 2 \\ 1 \end{pmatrix} \quad \text{or} \quad \vec{r} = \begin{pmatrix} 0 \\ 0 \\ 2 \end{pmatrix} + \mu \begin{pmatrix} -\frac{2}{3} \\ -\frac{2}{3} \\ -\frac{1}{3} \end{pmatrix}$$

At F ,

$$\left[\begin{pmatrix} 0 \\ 0 \\ 2 \end{pmatrix} + \mu \begin{pmatrix} 2 \\ 2 \\ 1 \end{pmatrix} \right] \cdot \begin{pmatrix} 3 \\ 0 \\ 3 \end{pmatrix} = -4 \quad \text{OR} \quad \left[\begin{pmatrix} 0 \\ 0 \\ 2 \end{pmatrix} + \mu \begin{pmatrix} -\frac{2}{3} \\ -\frac{2}{3} \\ -\frac{1}{3} \end{pmatrix} \right] \cdot \begin{pmatrix} 3 \\ 0 \\ 3 \end{pmatrix} = -4$$

$$6 + \mu(6 + 3) = -4$$

$$\mu = -\frac{10}{9}$$

$$6 + \mu(-2 - 1) = -4$$

$$\mu = \frac{10}{3}$$

The coordinates of F are

$$\left(-\frac{20}{9}, -\frac{20}{9}, \frac{8}{9} \right)$$

Method 2:

$$\cos 45^\circ = \frac{\frac{5\sqrt{2}}{3}}{BF} \Rightarrow \left| \vec{BF} \right| = \frac{5\sqrt{2}}{3} \times \sqrt{2} = \frac{10}{3}$$




(or using Pythagoras' theorem)

	$\vec{BF} = \frac{10}{3} \begin{pmatrix} -\frac{2}{3} \\ -\frac{2}{3} \\ -\frac{1}{3} \end{pmatrix} = -\frac{10}{9} \begin{pmatrix} 2 \\ 2 \\ 1 \end{pmatrix}$ $\vec{OF} = -\frac{10}{9} \begin{pmatrix} 2 \\ 2 \\ 1 \end{pmatrix} + \begin{pmatrix} 0 \\ 0 \\ 2 \end{pmatrix} = \frac{1}{9} \begin{pmatrix} -20 \\ -20 \\ 8 \end{pmatrix}$ <p>The coordinates of F are $\left(-\frac{20}{9}, -\frac{20}{9}, \frac{8}{9}\right)$</p>
11	<p>(i)</p> <p>Let l be the slant height of the cone.</p> $l^2 = h^2 + r^2 \quad \text{-----(1)}$ <p>Using similar triangles,</p> $\frac{h-3}{l} = \frac{3}{r}$ $l = \frac{rh-3r}{3} \quad \text{-----(2)}$ <p>Equating (1) and (2),</p> $\left(\frac{rh-3r}{3}\right)^2 = h^2 + r^2 \quad \text{-----(*)}$ $r^2h^2 - 6r^2h + 9r^2 = 9h^2 + 9r^2$ $r^2(h^2 - 6h) = 9h^2$ $\therefore r = \frac{3h}{\sqrt{h^2 - 6h}} \quad (\text{Since } r > 0)$ <p>(ii)</p> <p>Volume of cone, $V = \frac{1}{3}\pi r^2h$</p> $= \frac{1}{3}\pi \left(\frac{3h}{\sqrt{h^2 - 6h}}\right)^2 h$ $= \frac{3\pi h^3}{h^2 - 6h}$ $= \frac{3\pi h^2}{h - 6}$ $\frac{dV}{dh} = \frac{6\pi h(h-6) - 3\pi h^2}{(h-6)^2}$ $= \frac{3\pi h^2 - 36\pi h}{(h-6)^2}$

$$\frac{dV}{dh} = 0 \quad \Rightarrow \quad 3\pi h^2 - 36\pi h = 0$$

$$h(h-12) = 0$$

$$h = 12 \text{ or } h = 0 \text{ (reject } \because h > 0)$$

h	12^-	12	12^+
Sign of $\frac{dV}{dh}$	- ve	0	+ ve
Tangent			

Thus, V is a minimum when $h = 12$

When $h = 12$,

$$r = \frac{3(12)}{\sqrt{(12)^2 - 6(12)}} = \frac{6}{\sqrt{2}} \quad (\approx 4.2426)$$

$$V = \frac{3\pi(12)^2}{12-6} = 72\pi \quad (\approx 226.195)$$

(iii)

Let R be the radius of the snowball

$$S = 4\pi R^2 \quad \Rightarrow \quad \frac{dS}{dt} = 8\pi R \frac{dR}{dt}$$

$$V = \frac{4}{3}\pi R^3 \quad \Rightarrow \quad \frac{dV}{dt} = 4\pi R^2 \frac{dR}{dt}$$

$$\text{When } R = 2.5, \quad \frac{dS}{dt} = -0.75 \quad \Rightarrow \quad 8\pi(2.5) \frac{dR}{dt} = -0.75$$

$$\frac{dR}{dt} = -\frac{3}{80\pi} \quad \text{or} \quad -\frac{0.0375}{\pi} \quad \text{or} \quad -0.0119366$$

$$\frac{dV}{dt} = 4\pi(2.5)^2 \left(-\frac{3}{80\pi} \right) = -\frac{15}{16} \quad \text{or} \quad -0.9375$$

At the instant when $R = 2.5$ m, the rate of decrease of volume is 0.9375 m^3 per minute.