



National Junior College
SH2 Preliminary Examination 2014

GEOGRAPHY

Higher 1
INSERT

8812/01
3 hours
27 August 2014

READ THESE INSTRUCTIONS FIRST

This Insert contains all the Figures and the Table referred to in the questions.

This document consists of 8 printed pages.

Table 1 for Question 2

Table 1: Number of HQ cities, HQs and the Command and Control Index of selected countries. (taken from GaWC, <http://www.lboro.ac.uk/gawc/rb/rb430.html>)

Country	HQ cities**		HQs		CCI*	
	2006	2012	2006	2012	2006	2012
Brazil	8	8	19	33	0.8881	2.1510
China	8	47	56	182	2.6032	9.5490
Germany	24	23	58	53	5.0570	4.3350
India	8	12	33	61	0.7943	1.7632
Japan	55	53	320	258	11.2524	9.3387
Russia	7	9	14	28	0.9384	2.0541
South Korea	7	7	50	68	1.8228	2.4230
United Kingdom	26	20	115	91	8.3224	7.0189
United States	116	105	695	533	37.7218	30.9521
TOTAL	386	433	2000	2000	100.00	100.00

* The CCI (Command and Control Index) is a measure of the position of cities in terms of their economic and political control in the global economy. The index takes into account the total number of companies headquartered in the city as well as other key indicators of firm size and performance as well.

**HQ Cities refer to the number of cities in the country with HQs.

Fig. 3 for Question 3

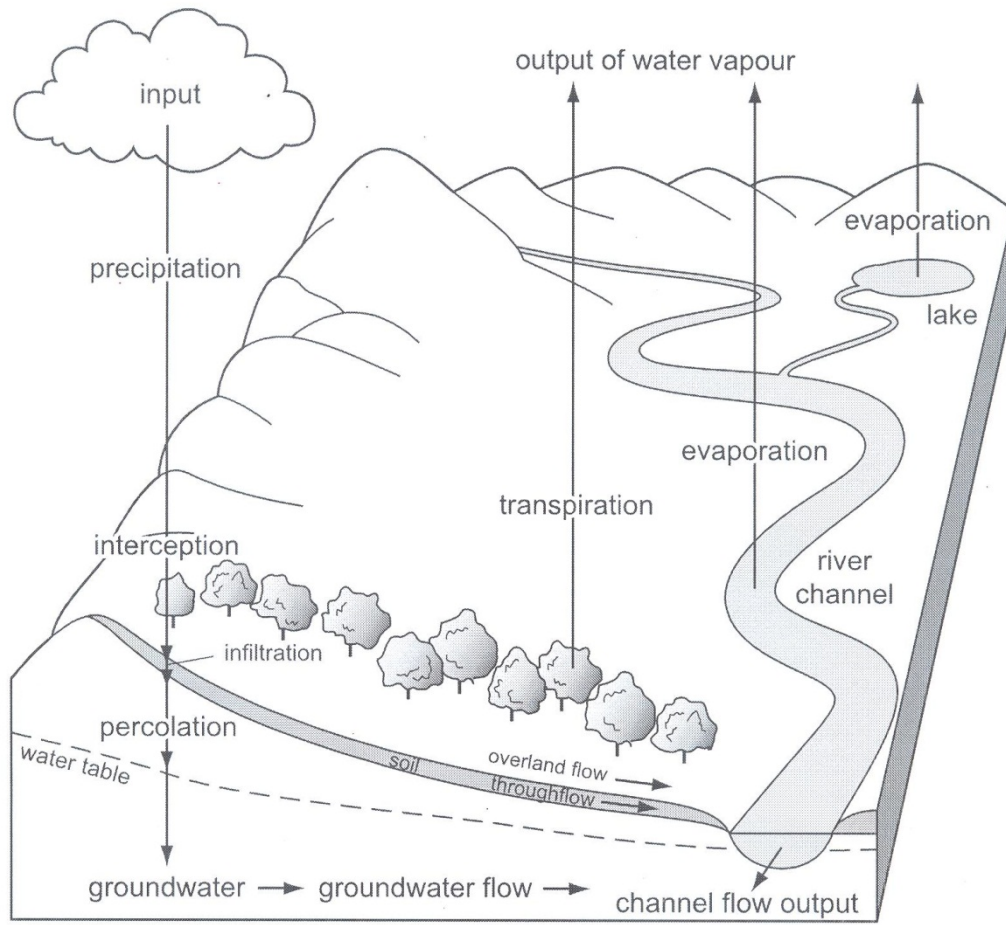


Fig. 4 for Question 3 OR

Figure 4: Location of The Mall at Cribbs Causeway.

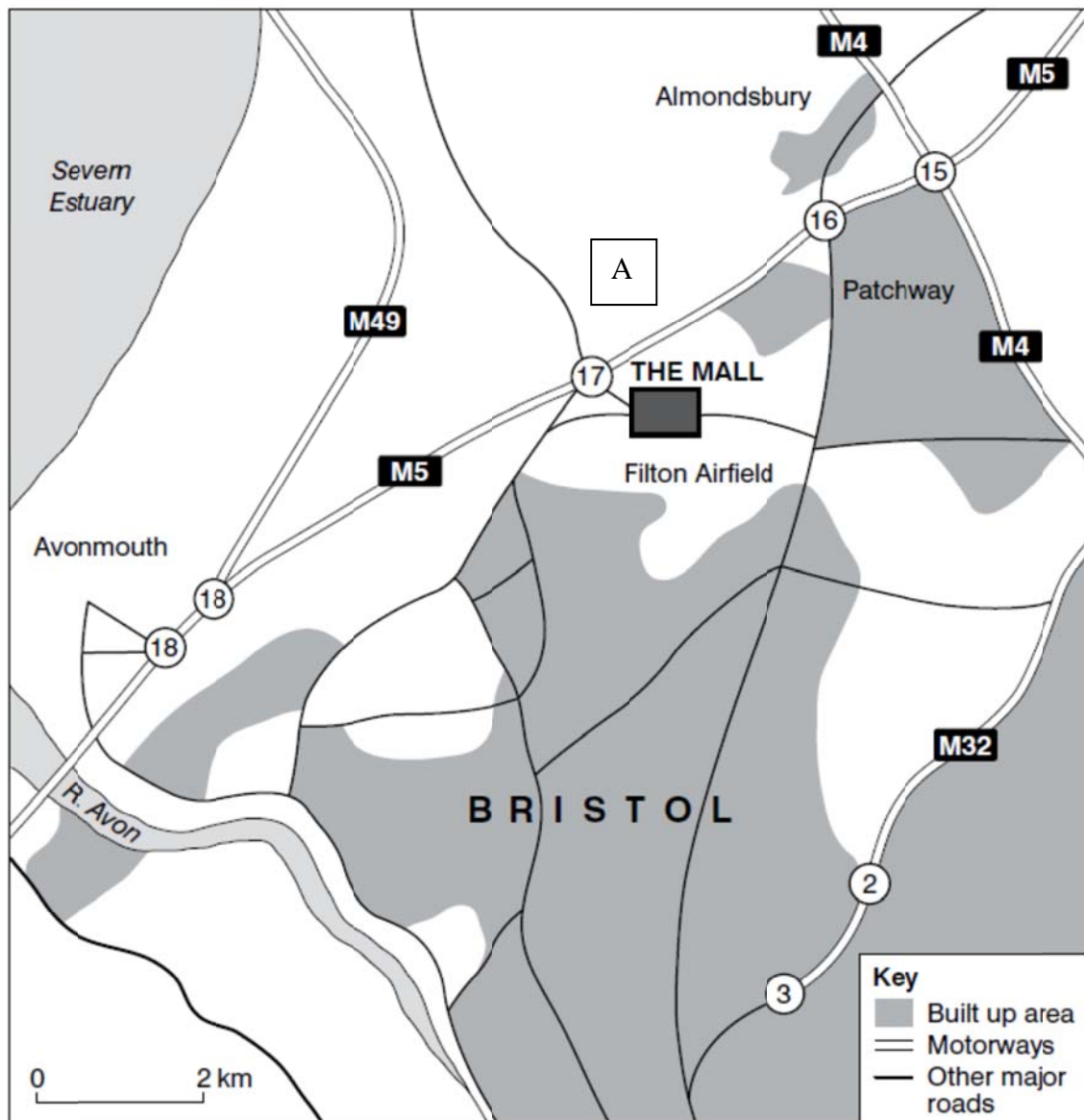
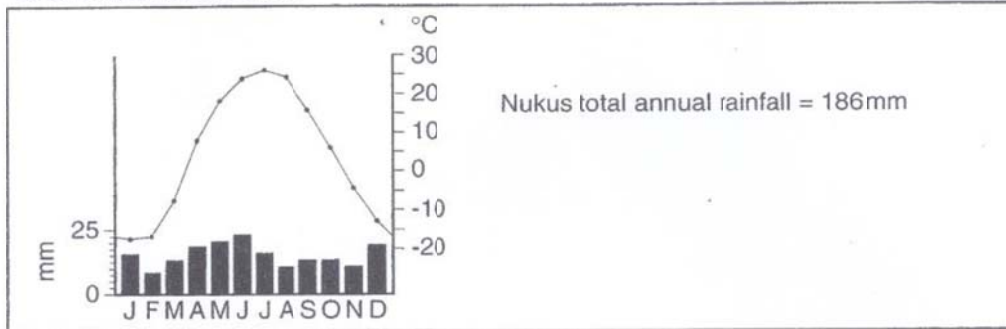


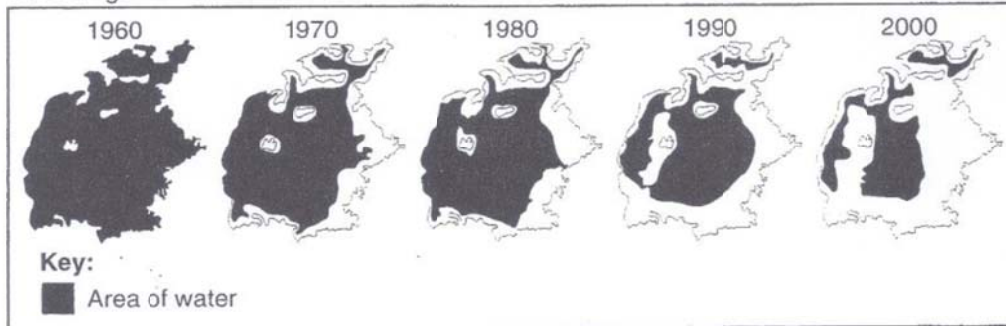
Fig. 4A, 4B and 4C for Question 4 Either

Figs. 3A, 3B and 3C for Question 4

A Climate chart for Nukus



B Changes to the surface area of the Aral Sea



C Irrigated areas in Central Asia



Fig. 5A and 5B for Question 4 OR

Figure 5: 5A shows the top 10 world cities with high airline connectivity and 5B shows the top 20 global cities with the highest foreign-born population.

Fig. 5A

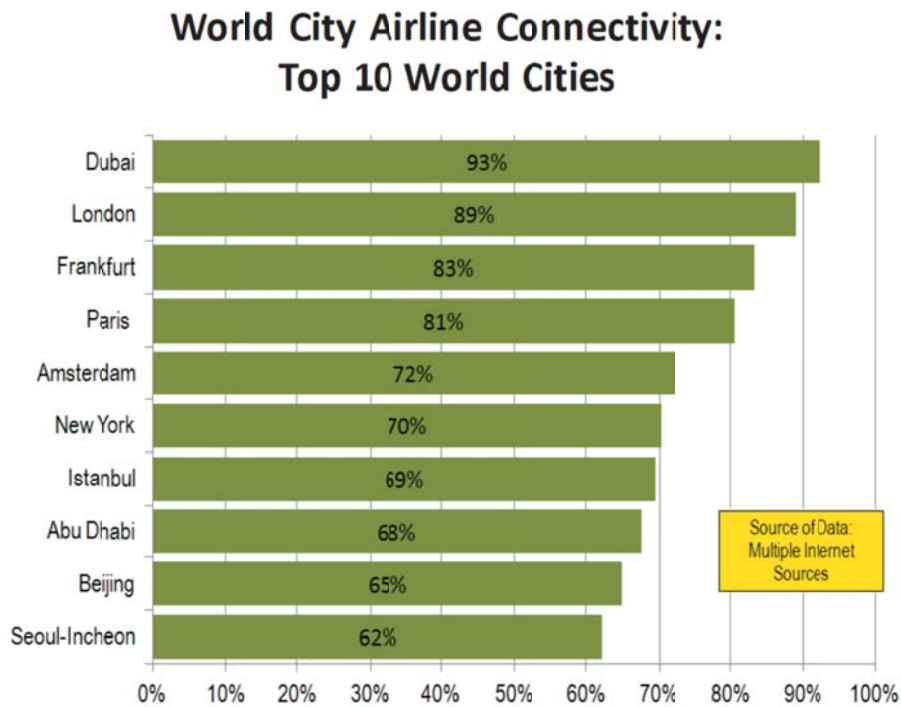


Fig. 5B

Top 20 Global Cities with More Than 20% Foreign-Born Population

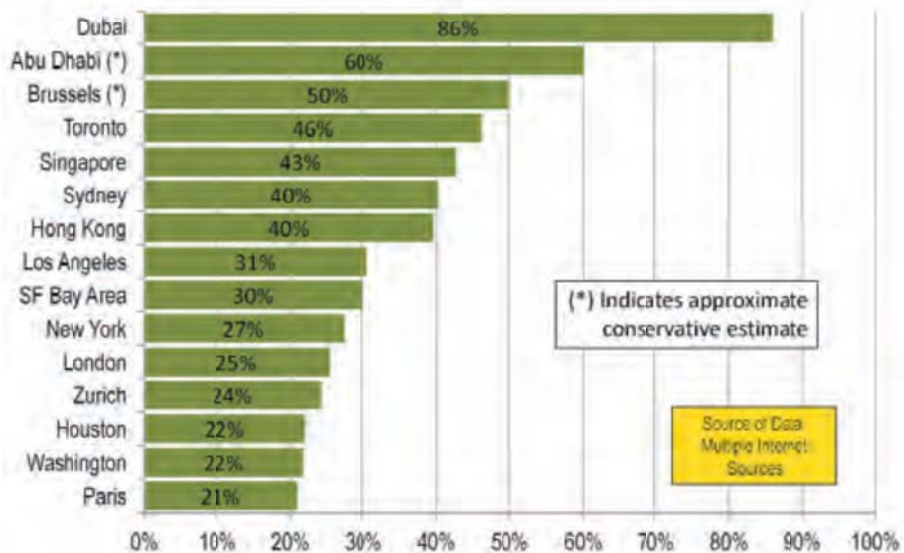
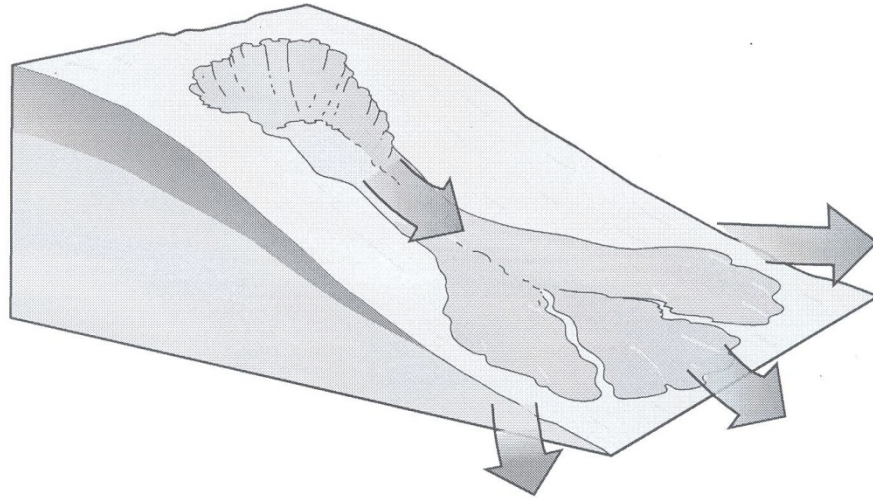


Fig. 6 for Question 5 EITHER

Mudflow



**Slump -
Rotational Slide**

